

Kangourou Sans Frontières



PreEcolier Test First Grade

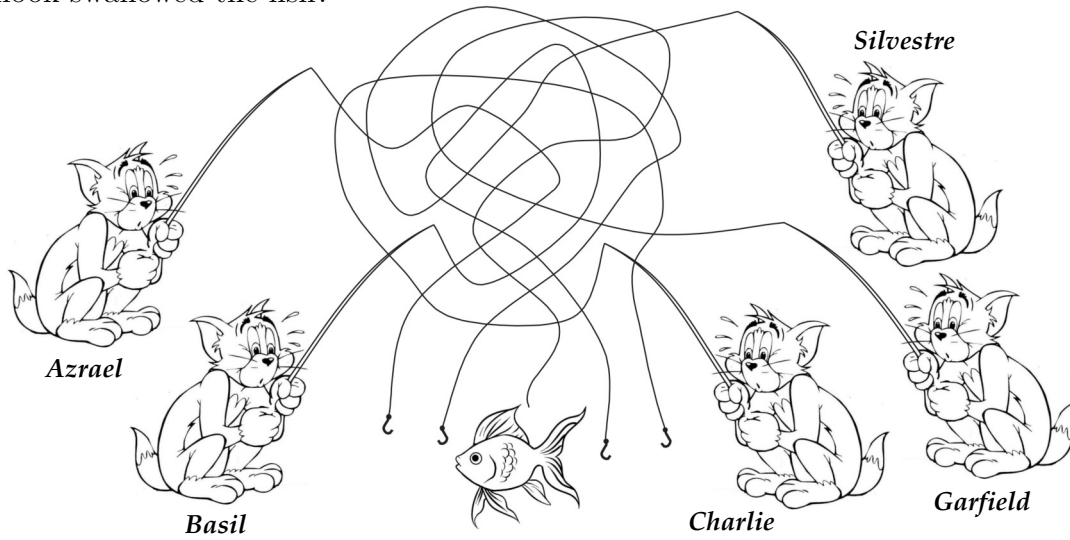
Name: _____

Institution: _____ Grade: _____

Costa Rica 2017


3 points

1. Who's hook swallowed the fish?



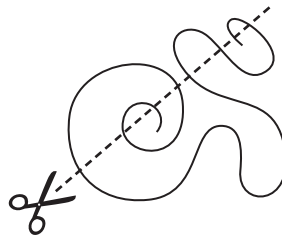
- (A) Azrael (B) Basil (C) Charlie (D) Garfield (E) Silvestre

2. In the picture there are 5-pointed, 6-pointed and 7-pointed stars. How many 5-pointed stars are there?




- (A) 2 (B) 3 (C) 4 (D) 5 (E) 9

3. In how many parts does the cut split the rope in the picture?








- (A) 5 (B) 6 (C) 7 (D) 8 (E) 9

4. Ellen wants to decorate the butterfly




with these stickers . Which butterfly can she make?



4 points

5. The entire pie as seen in the picture is divided among children. Each child receives a piece of the pie with three cherries on top. How many children are there?



(A) 3

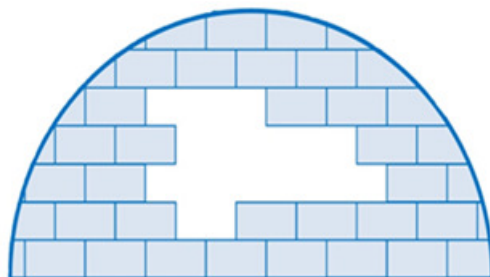
(B) 4

(C) 5


(D) 6






(E) 8

6. How many bricks like this (figure) are missing in the igloo?

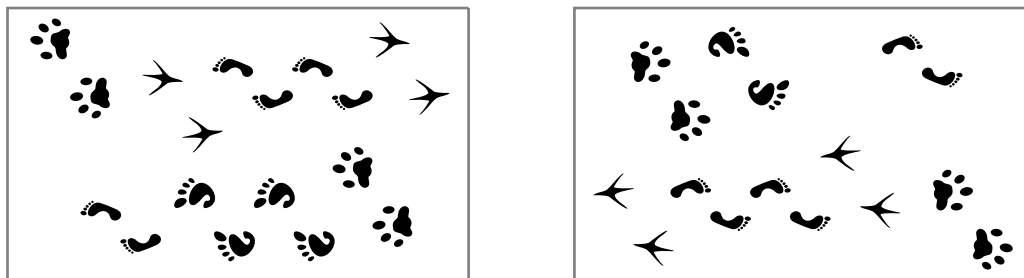


- (A) 8 (B) 9 (C) 10 (D) 11 (E) 12

7. In the drawing  we see a string of four beads. Which of the strings below is the same string?

- (A)  (B)  (C)  (D)  (E) 


8. A picture of footprints was turned upside down. Which footprints are missing?



- (A)  (B)  (C)  (D)  (E) 

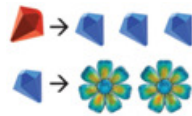
5 points

9. In Old McDonald's Barn there are one horse, two cows and three pigs.
How many more cows does McDonald Barn need so that half of all the animals are cows?



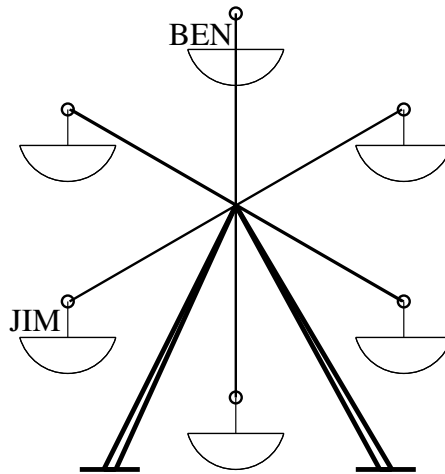
- (A) 0 (B) 1 (C) 2 (D) 3 (E) 4

10. In the country of Jewelries you can trade three sapphires for one ruby (picture 1). For one sapphire you can trade two flowers (picture 2). How many flowers can be traded for two rubies?



- (A) 6 (B) 8 (C) 10 (D) 12 (E) 14

11. At some moment Jim and Ben sat on the carousel as in the picture. Carousel turned moving Ben to the place where previously was Jim. At that moment where was Jim?



- (A) (B) (C) (D) (E)

12. Which stamp was it used to get the figure?

